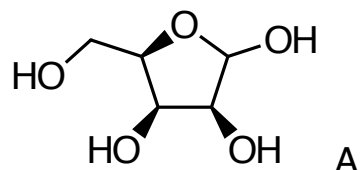


Synthesis Challenge # 35

AG Wegner

28.05.2015



1-3



4-5




- 1) acetone H_2SO_4
- 2) Ohira-Bestmann reagent, K_2CO_3 , MeOH
- 3) 2,2-DMP, PTSA, CH_2Cl_2

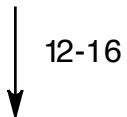
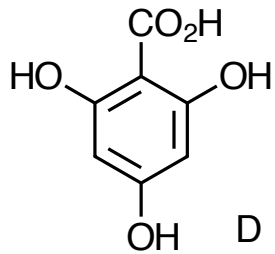
- 4) **I**, $n\text{BuLi}$, $\text{BF}_3 \cdot \text{OEt}_2$, THF -78°C
- 5) Raney-Ni, H_2 , THF, rt

What is the name of compound A?
Is it D or L configured?

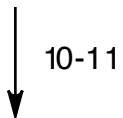
In step 1 only one regioisomer is formed.
Why?
How do you prepare the Ohira-Bestmann reagent?



How do you prepare **I** enantioselective?



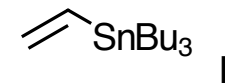
C + E



- 6) TFA, TFAA, acetone, rt
- 7) PPh₃, DIAD, MeOH, THF
- 8) Tf₂O, py, 0°C
- 9) **II**, Pd(PPh₃)₄, LiCl, PPh₃, DMF, rt

- 10) NaH, THF, 0°C to rt
- 11) dil. H₂SO₄, MeOH, 10°C

- What is the name of the reaction in step 7)?
- What is the role of LiCl in Step 9)?

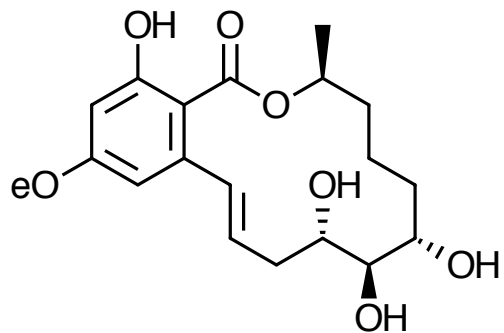


- Hint: In step 10) only one acetonide is cleaved selectively. Possible explanations?

12-13
↓



14-15
↓



Paecilomycin F

12) NaIO_4 , THF/water (3:1)
13) Zn, allyl bromide, THF/ NH_4Cl

Please, explain the selectivity in step 13).

14) Hoveyda-Grubbs II, toluene, 70°C
15) $\text{MeOH}\cdot\text{HCl}$, 0°C to rt

What is the structure of Hoveyda-Grubbs II?